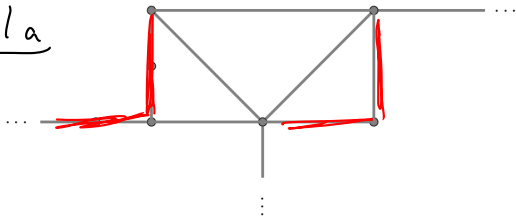


# Math 1015 Homework #11

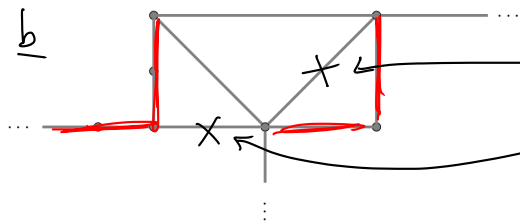
#1, 2, 3a, 4

#1a



Must use all edges at degree 2 vertz

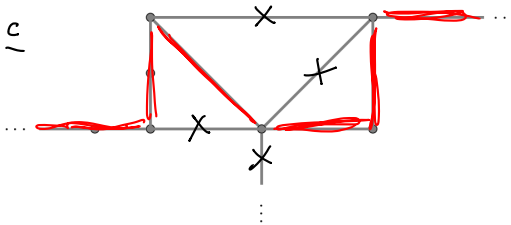
b



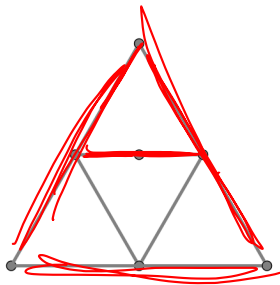
this would make a subcircuit

this would make 3-way on the left.

c



#2



After choosing edges at degree 2 vertz, we were forced to make a subcircuit & also 3-ways

